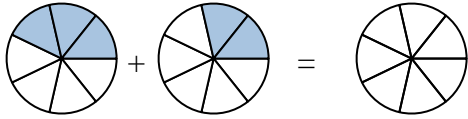




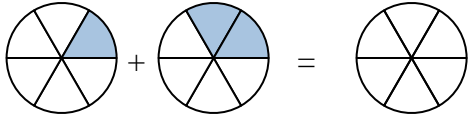
Shade in the fraction to solve the problem.

Ex)



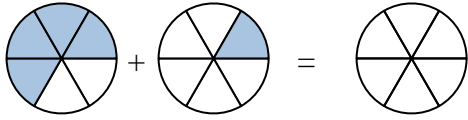
Ex. $\frac{3}{7}$ $\frac{2}{7}$ $\frac{5}{7}$

1)



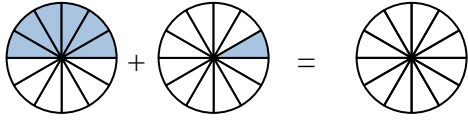
1. _____

2)



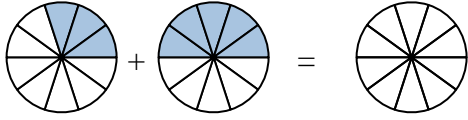
2. _____

3)



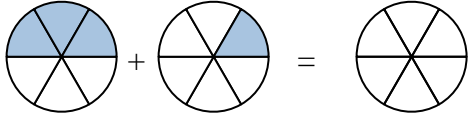
3. _____

4)



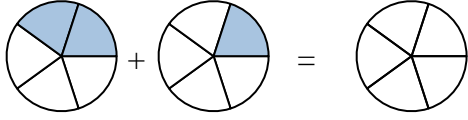
4. _____

5)



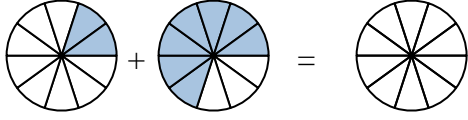
5. _____

6)



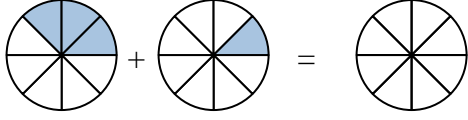
6. _____

7)



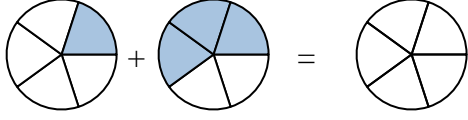
7. _____

8)



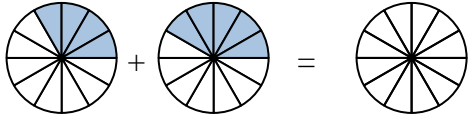
8. _____

9)



9. _____

10)

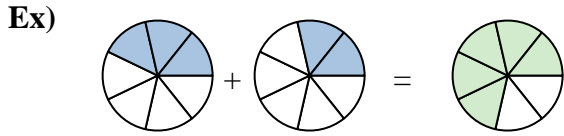


10. _____

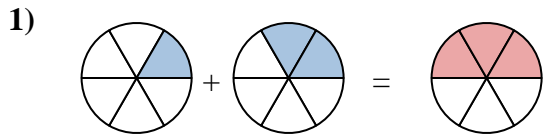
Answers



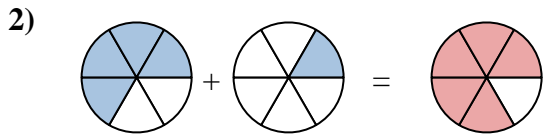
Shade in the fraction to solve the problem.



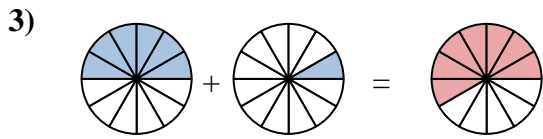
Ex. $\frac{3}{7}$ $\frac{2}{7}$ $\frac{5}{7}$



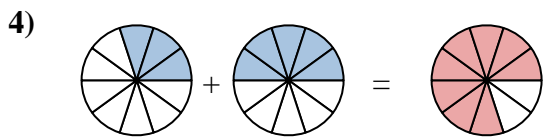
1. $\frac{1}{6}$ $\frac{2}{6}$ $\frac{3}{6}$



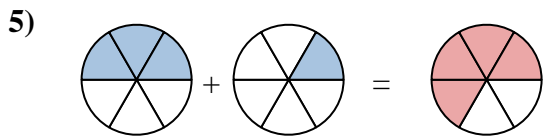
2. $\frac{4}{6}$ $\frac{1}{6}$ $\frac{5}{6}$



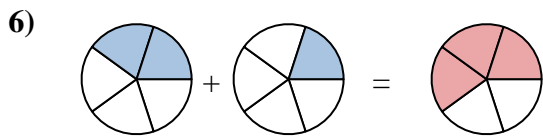
3. $\frac{6}{12}$ $\frac{1}{12}$ $\frac{7}{12}$



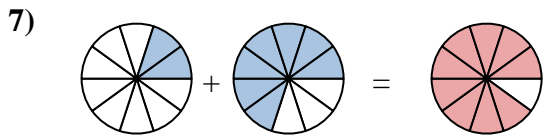
4. $\frac{3}{10}$ $\frac{5}{10}$ $\frac{8}{10}$



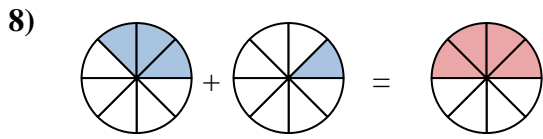
5. $\frac{3}{6}$ $\frac{1}{6}$ $\frac{4}{6}$



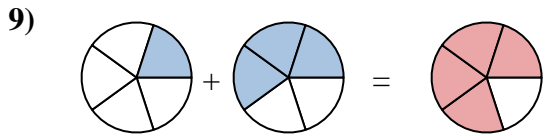
6. $\frac{2}{5}$ $\frac{1}{5}$ $\frac{3}{5}$



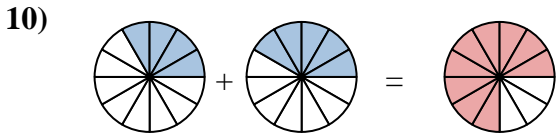
7. $\frac{2}{10}$ $\frac{7}{10}$ $\frac{9}{10}$



8. $\frac{3}{8}$ $\frac{1}{8}$ $\frac{4}{8}$



9. $\frac{1}{5}$ $\frac{3}{5}$ $\frac{4}{5}$



10. $\frac{4}{12}$ $\frac{5}{12}$ $\frac{9}{12}$

Answers